


KS4 DT Homework

Name: _____

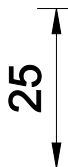


Task 1

Copy this isometric shape using a pencil and a ruler.



Task 2

Add dimensions to the following shapes in millimetres. The first one has been done for you.

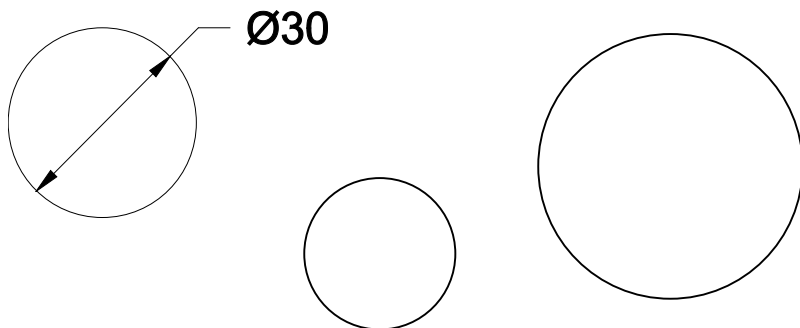


KS4 DT Homework

Name:

Task 3

Dimension the circles below in millimetres. The first one has been done for you.



Task 4

Complete the missing half of the drawing. Use a pencil and a ruler.

